

**Ngā  
Kaitiaki  
Moni**  
MONEY GUARDIANS

# Percentages Game

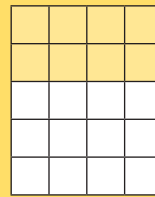
Percentages coloring in activity –  
practice your maths skills!

## Instructions:

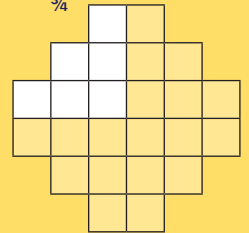
Count how many cubes there are.  
Colour in the correct  
percentage of the cube.

Examples:

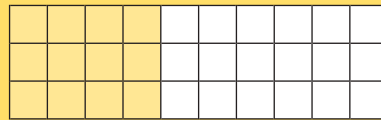
$\frac{2}{5}$  of 20



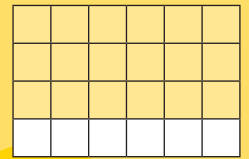
$\frac{3}{4}$



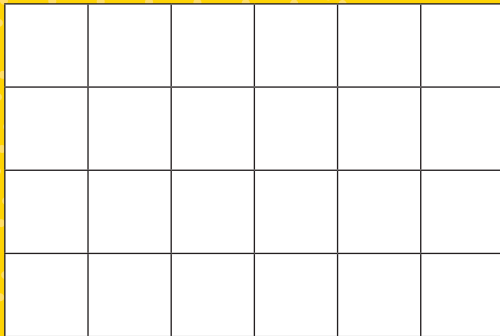
$\frac{4}{10}$  of 30



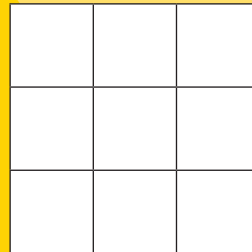
$\frac{3}{4}$  of 24



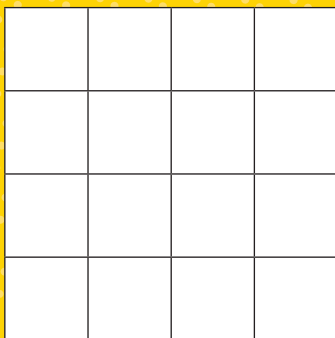
1 Colour in  $\frac{1}{2}$  of the cube



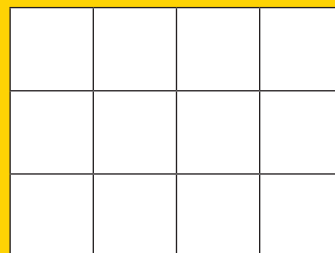
2 Colour in  $\frac{2}{3}$  of the cube



3 Colour in  $\frac{1}{4}$  of the cube



4 Colour in  $\frac{2}{3}$  of the cube



1. 24 squares in total. 12 squares coloured in.  
2. 9 squares in total. 6 squares coloured in.  
3. 16 squares in total. 4 squares coloured in.  
4. 12 squares in total. 8 squares coloured in.

**MORE FUN GAMES & QUIZZES**  
are online now at:  
[whairawa.com/tamariki](http://whairawa.com/tamariki)